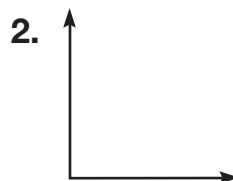
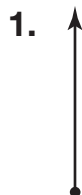

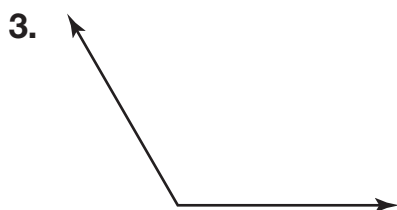


Name _____

Line Segments, Rays, and Angles

Use geometric terms to describe what is shown. Be as specific as possible.





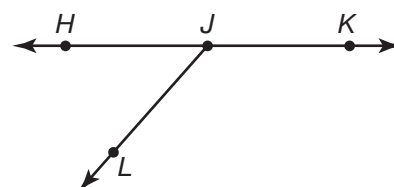
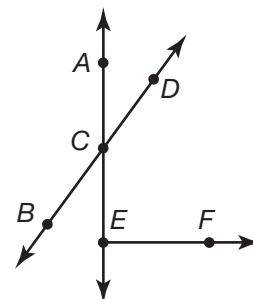
For 5–7, use the diagrams to the right.

5. Name two line segments.

6. Name two obtuse angles.

7. Which is the geometric term for angle HJK ?

- A** Acute angle **C** Right angle
B Obtuse angle **D** Straight angle



8. **Writing to Explain** Describe an acute angle.
